

Adding fractions

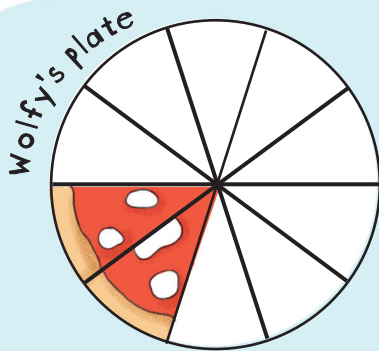
It's time for lunch and there's room on Wolfy's plate for 10 slices of pizza in total, but he only has 2 so far.

Draw another 4 slices, then fill in the empty box to show the fraction of Wolfy's plate now covered by pizza.



I'm sooo hungry!

Wolfy



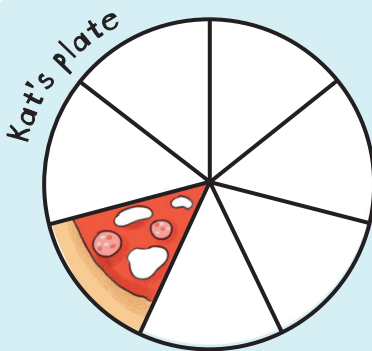
$$\frac{2}{10} + \frac{4}{10} = \frac{\boxed{}}{10}$$

Draw 2 more slices of pizza on Kat's plate. Trace the numbers in the fractions then fill in the empty box.

I'm hungry like the wolf.



Kat




$$\frac{1}{7} + \frac{2}{7} = \frac{\boxed{}}{7}$$

Draw 1 more slice of pizza on Gloria's plate. Trace the numbers in the fractions then fill in the empty box.



Gloria



$$\frac{3}{5} + \frac{1}{5} = \frac{\boxed{}}{5}$$