


Word problems for 9 and 11

Wolfy, Bruce and Hop are growing flowers in the garden.
Write a multiplying calculation to answer each animal's question.



$$\square \times \square = \square$$




I'm going to plant 4 rows of 9 poppies. How many poppies will there be altogether?

wolfy


My full watering can holds enough water for 8 flowers. If I filled it 11 times, how many flowers could I water?



$$\square \times \square = \square$$



$$\square \times \square = \square$$

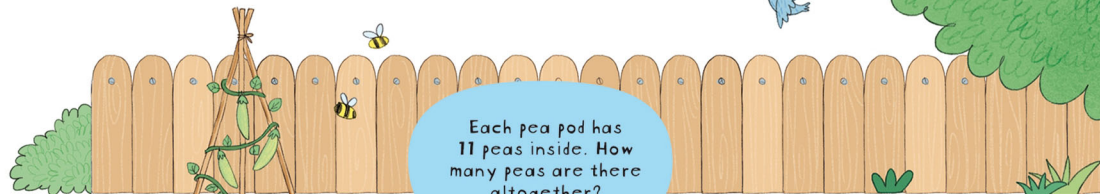


Each of my flowers has 10 petals. How many petals are there altogether?



9 18 27 36 45 54 63 72 81 90

Pin, Gloria and Kat are growing vegetables.
Write a multiplying calculation to answer each animal's question.



Each pea pod has 11 peas inside. How many peas are there altogether?


$$\square \times \square = \square$$



I have sown 9 carrot seeds in each row. How many seeds have I sown altogether?



$$\square \times \square = \square$$



$$\square \times \square = \square$$

How many peppers will there be if 9 grow on each plant?



11 22 33 44 55 66 77 88 99 110