


# ALL AT SEA


## Cruise ship

Michael is in his cabin.  
Can you help him get  
to the swimming pool?  
He can go up and down  
stairs and ladders, and  
go through open doors.



## Sail boat

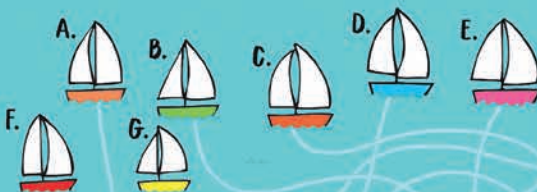
How many triangles can you  
count on this boat?



There are ..... triangles

## Sailing trip


These boats are sailing together, but some have been  
blown off course. Which boats reach the island? .....



## Busy marina

Write in how many of these types of boats you can see in the picture below.

..... boats with sails ..... red and blue boats ..... boats with six round port holes



SAIL BOAT: 14 triangles, some are inside each other.  
SAILING TRIP: 5 boats with sails, 4 red and blue boats,  
BUSY MARINA: 7 boats with six round port holes



Illustrations by Various  
Copyright © Usborne Publishing Limited, 2025.



# Usborne Activities

Find similar activities in **Travel Activity Book** Share your activities with us #UsborneActivities.

